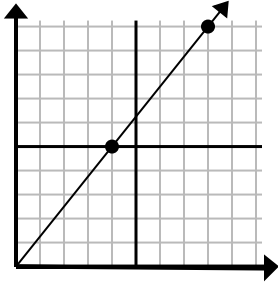




Determine which choice represents a point on the line if it were to continue.

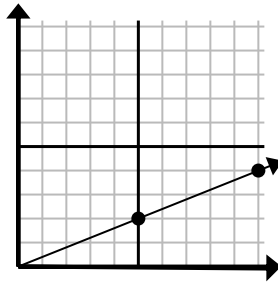
Answers

1)



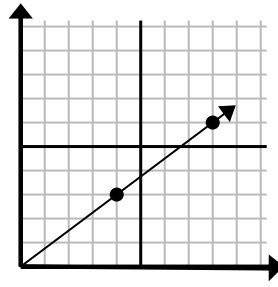
- A. (20 , 25)
- B. (12 , 15)
- C. (24 , 30)
- D. (11 , 10)

2)



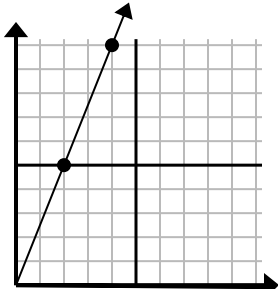
- A. (14 , 3)
- B. (20 , 8)
- C. (11 , 7)
- D. (15 , 6)

3)



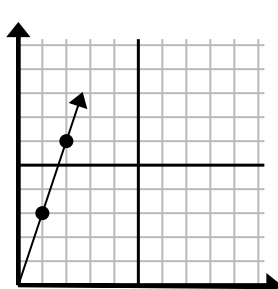
- A. (28 , 21)
- B. (12 , 9)
- C. (24 , 18)
- D. (16 , 12)

4)



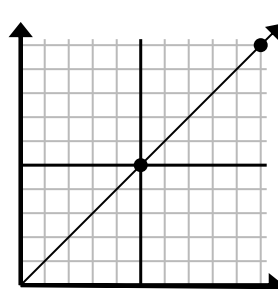
- A. (6 , 15)
- B. (5 , 9)
- C. (8 , 20)
- D. (12 , 30)

5)



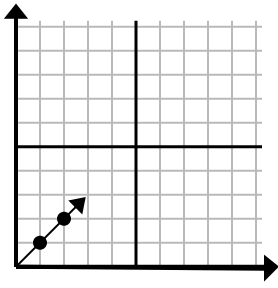
- A. (4 , 12)
- B. (3 , 9)
- C. (4 , 6)
- D. (7 , 6)

6)



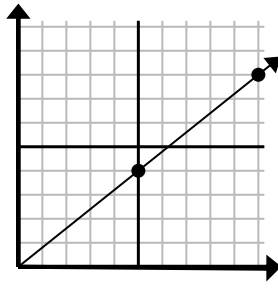
- A. (14 , 9)
- B. (15 , 15)
- C. (15 , 6)
- D. (30 , 30)

7)



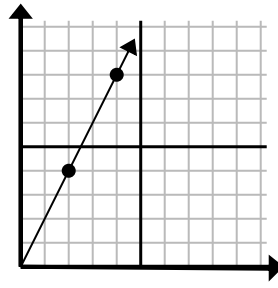
- A. (5 , 6)
- B. (3 , 3)
- C. (5 , 5)
- D. (7 , 3)

8)



- A. (15 , 12)
- B. (35 , 28)
- C. (14 , 8)
- D. (14 , 5)

9)

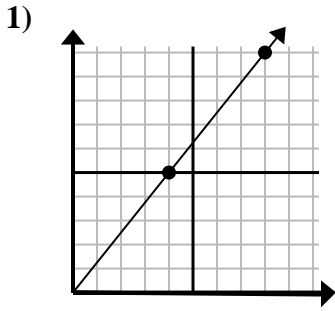


- A. (6 , 12)
- B. (7 , 9)
- C. (10 , 20)
- D. (8 , 16)

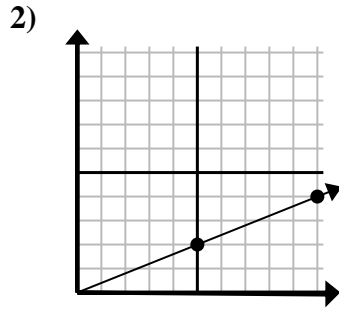
1. _____
2. _____
3. _____
4. _____
5. _____
6. _____
7. _____
8. _____
9. _____



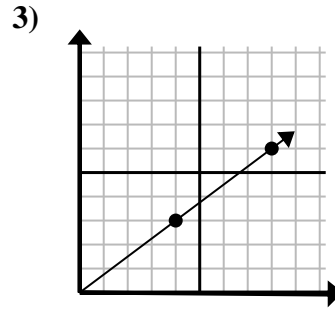
Determine which choice represents a point on the line if it were to continue.



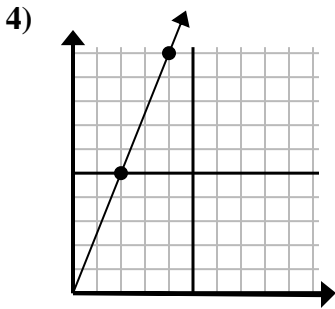
- A. (20 , 25)
- B. (12 , 15)
- C. (24 , 30)
- D. (11 , 10)



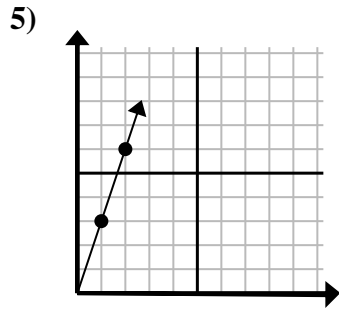
- A. (14 , 3)
- B. (20 , 8)
- C. (11 , 7)
- D. (15 , 6)



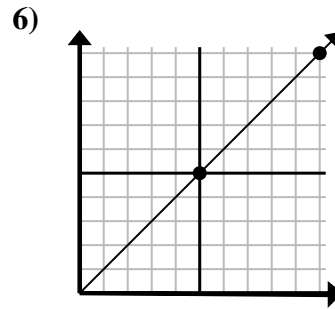
- A. (28 , 21)
- B. (12 , 9)
- C. (24 , 18)
- D. (16 , 12)



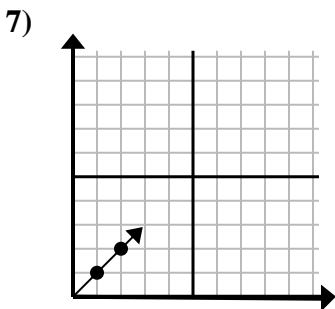
- A. (6 , 15)
- B. (5 , 9)
- C. (8 , 20)
- D. (12 , 30)



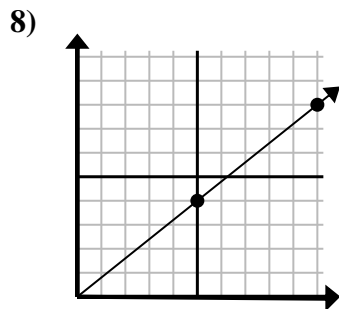
- A. (4 , 12)
- B. (3 , 9)
- C. (4 , 6)
- D. (7 , 6)



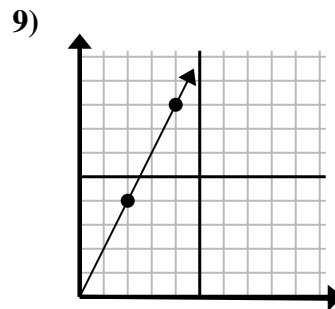
- A. (14 , 9)
- B. (15 , 15)
- C. (15 , 6)
- D. (30 , 30)



- A. (5 , 6)
- B. (3 , 3)
- C. (5 , 5)
- D. (7 , 3)



- A. (15 , 12)
- B. (35 , 28)
- C. (14 , 8)
- D. (14 , 5)



- A. (6 , 12)
- B. (7 , 9)
- C. (10 , 20)
- D. (8 , 16)

Answers

- 1. **B**
- 2. **D**
- 3. **B**
- 4. **A**
- 5. **B**
- 6. **B**
- 7. **B**
- 8. **A**
- 9. **A**